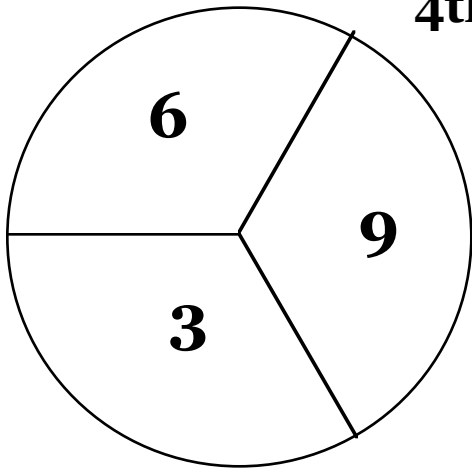


4th STATISTICS AND PROBABILITY

(with questions completed)

S&P-3

S&P-4

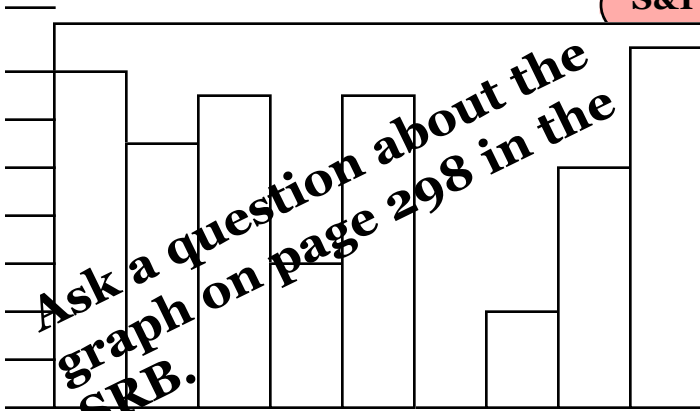


What is the probability of landing on an even number.

3 , 7 , 7 , 9 , 10

Find the mode and range of the data above

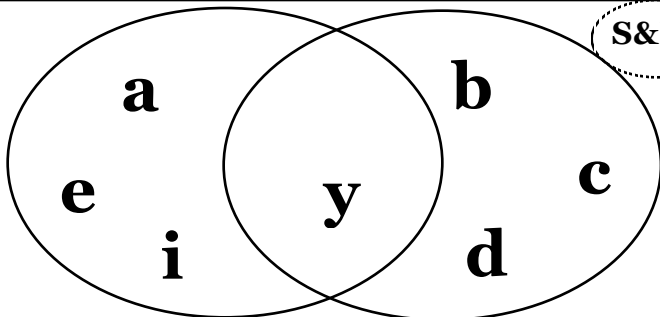
S&P-2



S&P-5

How many ways can you pick three coins from a bag containing a dime , a penny and a nickel ?

S&P-2



Looking at this diagram, what do you know about y?

S&P-4



When rolling just one die, what is the probability of rolling?

S&P-4



What is the probability of drawing an Ace from a full deck of 52 cards?

S&P-2

Ask a question about a table on page 302 in the SRB.