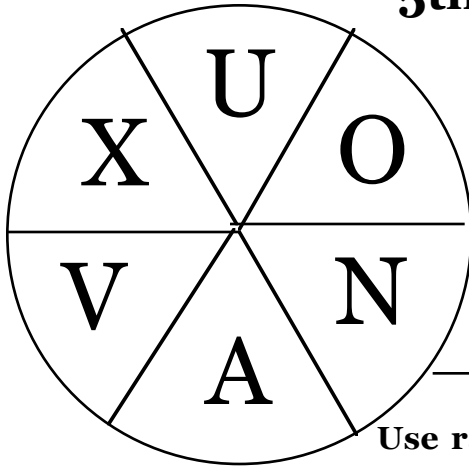


S&P-4

S&P-5

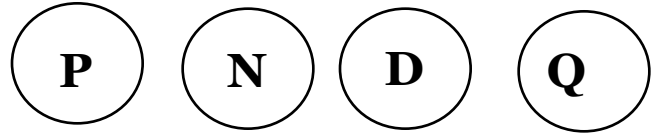


What is the probability of landing on a vowel

Use ratio or fraction

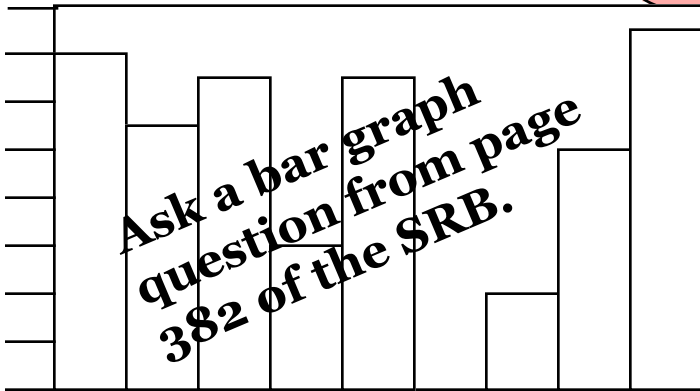
Show how many ways can you make \$ .25

Use



S&P-2

S&P-3

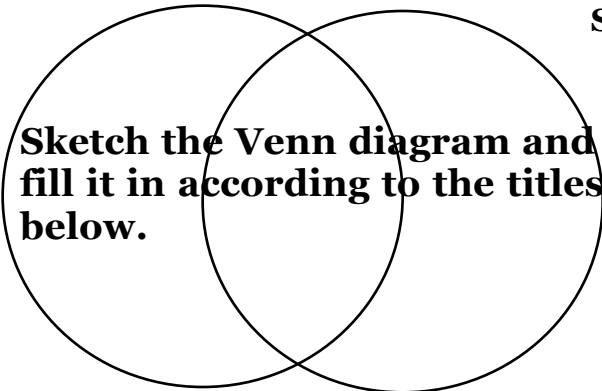


24, 72, 24, 51, 95,

Find mode, median, range

S&P-2

S&P-4



Sketch the Venn diagram and fill it in according to the titles below.

Even numbers to 16

Square numbers to 16



When using both dice, what is the probability of rolling a square number?

Use ratio or fraction

S&P-4



What is the probability of drawing a red card from a full deck of 52 cards?

Use ratio or fraction

S&P-2

