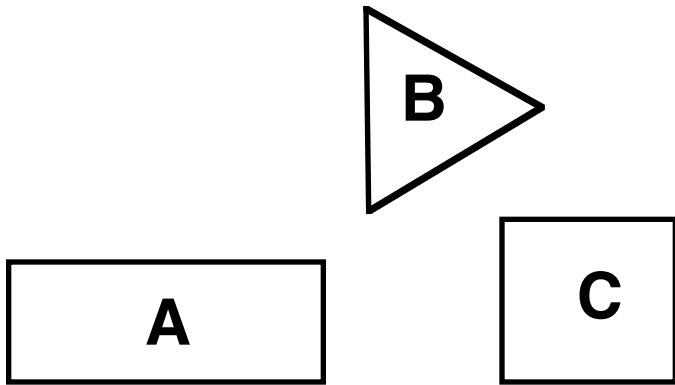


G-1

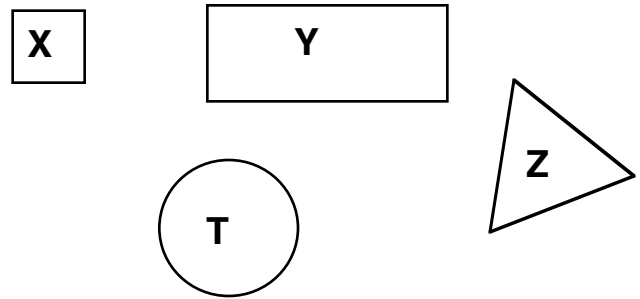
3rd GEOMETRY

G-2


Name each shape.



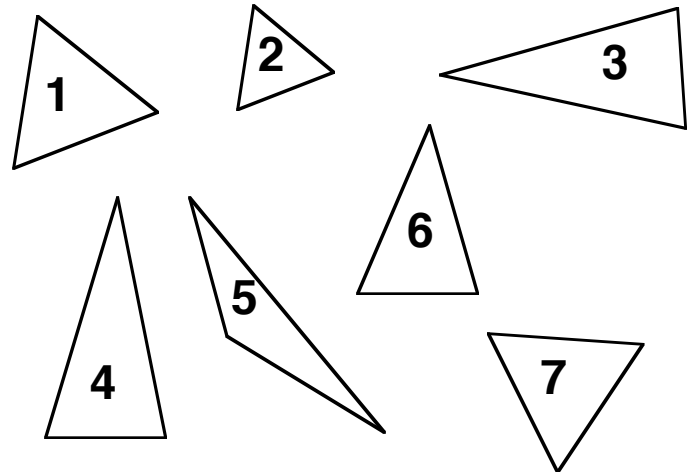
Name each figure.



G-2 Name the three dimensional figures below.




Find any two congruent shapes.



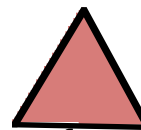
G-3

How many lines of symmetry?



Draw other triangles that are slides, flips, or turns of this one.

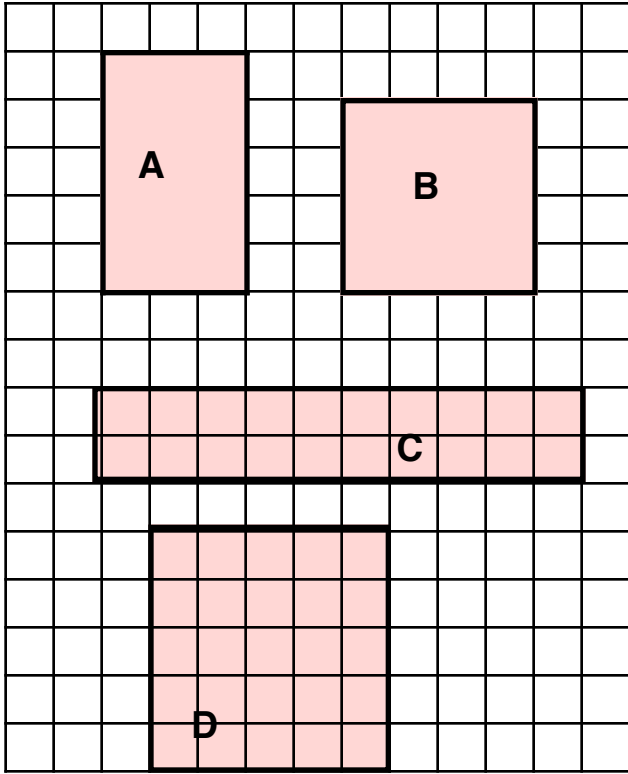
G-5



Is this transformation a result of slides, flips, or turns of the shaded shape?

G-6

What is the area and perimeter of _____ ?



G-8

Use square, rectangle, triangle, or circle.

Name something in the world that is the shape of a

G-7

...is the triangle (inside, to the right of, to the left of) the circle?

...are the triangles (vertical, horizontal) to each other?

In which figure...

_____.

