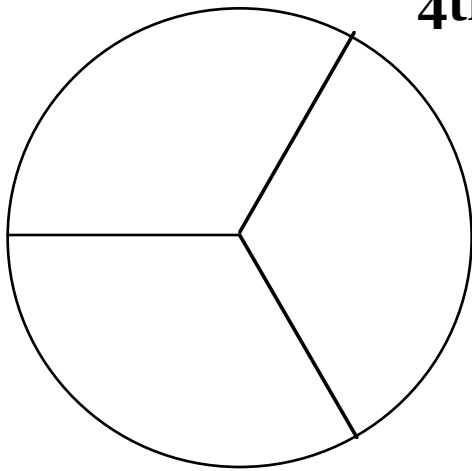


4th STATISTICS AND PROBABILITY



S&P-4


What is the probability of landing on....

S&P-3

_____ , _____ , _____ , _____ , _____

Find the mode and range of the data above

S&P-2



S&P-5

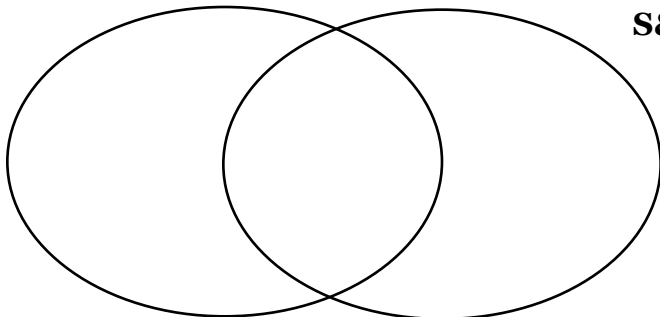
How many ways can you pick three _____ from a bag

containing _____ ,

_____ , and

_____ ?

S&P-2



S&P-4



When rolling just one die, what is the probability of rolling

S&P-4



What is the probability of drawing a _____ from a full deck of 52 cards?

S&P-2

Ask a question about the table on page _____ in the SRB.