



S&P-4

Is it fair if you win when you roll 2 dice, take the sum, and get a square number? Why?

S&P-5

How many ways can you make a sundae, with these items....

ice cream	Sauce	Topping
vanilla	Chocolate	Nuts
	Strawberry	Sprinkles
		Chips

S&P-2

Grades on your last 5 tests

S&P-3

**60, 72, 79, 100, 100**

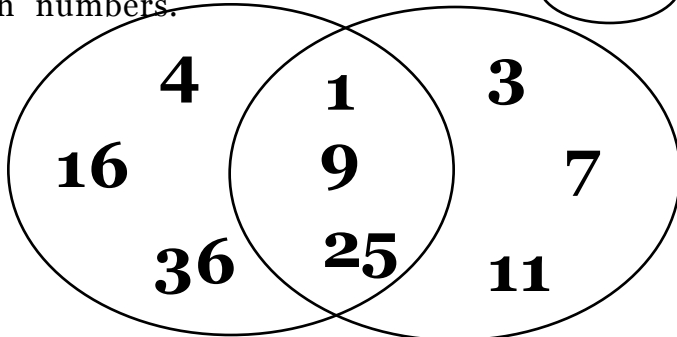
Find mean, mode, median, range

Which landmark of data would you like me to use for your total grade? Why

Ask a question about the table on page 372 in the SRB.


Use prime, square, composite, odd, even numbers.

S&P-2



Square Numbers

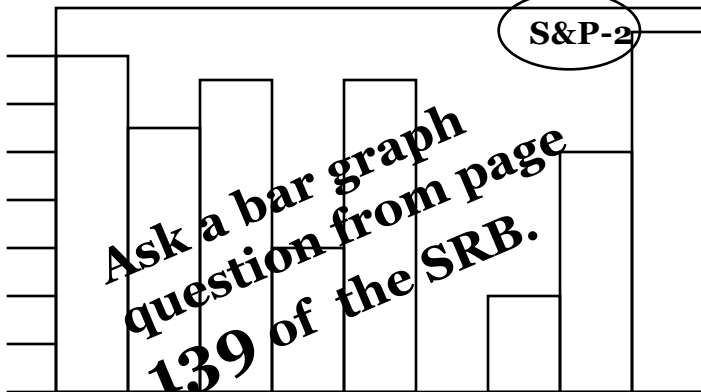
Odd Numbers

What do you know about **1, 9, 25**?

S&P-2

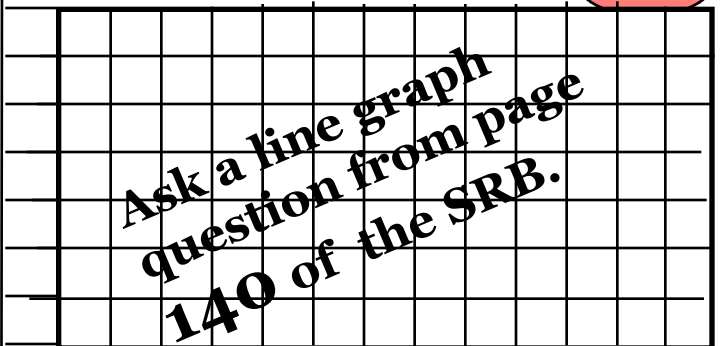
Ask a circle graph question from page 145 of the SRB.

S&P-2



Ask a bar graph question from page 139 of the SRB.

S&P-2



Ask a line graph question from page 140 of the SRB.