



Name: _____



★ Subtract Within 5



$$4 - 2 = \underline{\hspace{1cm}}$$



$$5 - 1 = \underline{\hspace{1cm}}$$

● Subtract Within 10




$$8 - 3 = \underline{\hspace{1cm}}$$



$$7 - 4 = \underline{\hspace{1cm}}$$

★ **Have children subtract objects.** Say: 4 pillows. Take away 2 pillows. How many pillows are left? Children may mark an X on the pillows they are subtracting. Repeat with 5 – 1 cats.

● **Have children subtract objects.** Say: 8 cans of food. Take away 3 cans of food. How many cans of food are left? Children may mark an X on the cans they are subtracting. Repeat for 7 – 4 toy mice.



🌸 Word Problems



$2 + 6 =$



$7 - 2 =$

🌟 Practice Facts to 5

$4 - 1 =$

$1 + 2 =$

$5 - 3 =$

🌸 **Have children solve word problems.** Say: *There are 2 bowls. The cats get 6 more bowls. How many bowls in all?* Have children write the answer in the equation. Repeat. Say: *There are 7 toy mice. 2 toy mice get lost. How many are left?*

🌟 **Have children complete each fact.** Ask children to complete each fact and write the answer in the equation.